

## Worksheet 1

### A. Say whether the following statements are True or False:

1. CFC is the name of a new cricket team. \_\_\_\_\_
2. Global warming is caused by the Greenhouse Effect. \_\_\_\_\_
3. Warming of oceans causes rainfall to decrease. \_\_\_\_\_
4. We can do nothing to control Global Warming. \_\_\_\_\_
5. Trees are a great help in controlling Global Warming. \_\_\_\_\_

### B. Select the right options to complete each sentence:

1. Global Warming can cause  
(a) floods (b) accidents (c) deserts
2. In place of plastic bags, we should use bags made of  
(a) leather (b) thermocol (c) jute
3. We should use paper that is  
(a) already used (b) recycled (c) thrown away
4. Burning wood and fossil fuels releases more  
(a) carbon dioxide (b) hydrogen (c) oxygen
5. If Global Warming continues, many species will become  
(a) larger (b) smaller (c) extinct

### C. Fill in the blanks:

1. The air that surrounds the Earth is called the \_\_\_\_\_.
2. Floods can cause \_\_\_\_\_ and \_\_\_\_\_.
3. Some of the greenhouse gases are \_\_\_\_\_, \_\_\_\_\_ and \_\_\_\_\_.
4. Melting of glaciers and ice-caps causes the \_\_\_\_\_ to rise.
5. CFCs are released by \_\_\_\_\_ and \_\_\_\_\_.

## Worksheet 2

A. Name the natural disasters shown below.



1. \_\_\_\_\_



2. \_\_\_\_\_



3. \_\_\_\_\_

B. Name those creatures that are endangered.



1. \_\_\_\_\_



2. \_\_\_\_\_



3. \_\_\_\_\_



4. \_\_\_\_\_



5. \_\_\_\_\_

C. Tick those of the following that can help control Global Warming:



1. \_\_\_\_\_



2. \_\_\_\_\_



3. \_\_\_\_\_

D. **Project:** Write a paragraph about how you would like to improve the environment. Paste pictures too.

## Worksheet 3

1. Name four types of natural disasters.

---

---

2. What is a cyclone? Where in India have we had cyclones that affected the life of the people frequently?

---

---

3. How does a tsunami occur? If you are standing on the coast, what will you see in a tsunami?

---

---

4. A landslide can be caused in the mountains due to many reasons. Think and give three reasons why landslides occur.

---

---

5. What is the study of earthquakes called? What instrument is used to measure the intensity of an earthquake?

---

---

## Worksheet 4

A. Name the natural disasters given below.



1. \_\_\_\_\_



2. \_\_\_\_\_



3. \_\_\_\_\_

B. On a map of India, mark one place that had drought, one that had floods, one a cyclone, one a tsunami and one an earthquake. Write down the names of the states below.

1. Drought \_\_\_\_\_

2. Floods \_\_\_\_\_

3. Cyclone \_\_\_\_\_

4. Tsunami \_\_\_\_\_

5. Earthquake \_\_\_\_\_

C. Name these things. They are useful in case of a natural disaster:



1. \_\_\_\_\_



2. \_\_\_\_\_



3. \_\_\_\_\_



4. \_\_\_\_\_



5. \_\_\_\_\_

## Worksheet 5

### A. Answer the following questions briefly.

1. What is the length of the Indian coastline?

---

---

2. Before the wheel was invented, how were goods carried?

---

---

3. On what does the mode of transport we use depend?

---

---

4. Name two Trans-Continental Railways.

---

---

### B. Fill the blanks.

1. Huge aeroplanes move in the air with the help of \_\_\_\_\_.
2. Many rivers and lakes are used as \_\_\_\_\_.
3. India has a good network of highways called \_\_\_\_\_.
4. The same type of \_\_\_\_\_ cannot be used for all our needs.

### C. Match the names in Column A with suitable references in Column B.

#### Column A

1. Romans
2. James Watt
3. Metro
4. The Flyer

#### Column B

- (a) 1903
- (b) first roads
- (c) Rail
- (d) steam engine

## Worksheet 6

A. Name the following modes of transport.



1. \_\_\_\_\_



2. \_\_\_\_\_



3. \_\_\_\_\_



4. \_\_\_\_\_



5. \_\_\_\_\_

B. This canal links one continent with another. What is its name? Name the continents it links.



## Worksheet 7

### A. Select the correct option to complete each sentence below.

1. Early humans communicated through \_\_\_\_\_, \_\_\_\_\_, \_\_\_\_\_ and \_\_\_\_\_.  
(a) sounds, gestures, symbols, pictures.  
(b) caves, trees, lakes, rivers.  
(c) bells, drums, cymbals, pipes.
2. About 5000 years ago, humans developed \_\_\_\_\_.  
(a) printing press                      (b) language                      (c) cartoons
3. Initially messages were sent and received through \_\_\_\_\_ and \_\_\_\_\_.  
(a) soldiers, attendants              (b) elves, gnomes              (c) pigeons, couriers
4. The telegraph instrument was called a \_\_\_\_\_.  
(a) Morse Key                      (b) Baird Key                      (c) Marconi Key
5. Television is an important source of \_\_\_\_\_ and \_\_\_\_\_.  
(a) noise, pollution  
(b) energy, power  
(c) entertainment, communication

### B. Give brief answers to the following questions.


1. What was the Morse code based on?
2. What is the advantage of using e-mail?
3. Give two features of newspapers.
4. Explain with examples what is meant by 'live' programmes on TV.
5. How do advertisements affect our lifestyle? Explain using examples.

### C. Underline the right word out of the two given in each sentence:

1. The government spreads social awareness through loudspeakers/advertisements.
2. Philately/Philosophy is the hobby of collecting and studying stamps.
3. The e-mail is an electrical/electronic device used for communication.
4. Flipkart, Amazon and Snapdeal are online shopping websites/cobwebs.
5. The means of communication should never be misused for demonstrative/destructive purposes.

## Worksheet 8

A. Name the three men shown below and say what they invented.



1. \_\_\_\_\_



2. \_\_\_\_\_



3. \_\_\_\_\_

B. Name the following modes of communication:



1. \_\_\_\_\_



2. \_\_\_\_\_



3. \_\_\_\_\_



4. \_\_\_\_\_



5. \_\_\_\_\_

C. Make the following imaginary means of communication:

1. an e-mail address for a friend called Mowgli
2. a slogan to advertise a soap you have manufactured; the soap is called 'Bright'.



## Worksheet 9

### A. Say whether the following are true or false.

1. Gutenberg developed the printing press in the USA. \_\_\_\_\_
2. Hieroglyphics is the script developed by the Egyptians. \_\_\_\_\_
3. The decimal system was developed by the Arabs. \_\_\_\_\_
4. Devanagari is an Indian language. \_\_\_\_\_
5. Books in Braille are available in all parts of the world. \_\_\_\_\_

### B. Fill in the appropriate words.

1. Papyrus is a \_\_\_\_\_ found in the Nile delta in Egypt.
2. The \_\_\_\_\_ of Mesopotamia were probably the first to develop a script.
3. The English alphabet has \_\_\_\_\_ letters.
4. Indian scholars gave the \_\_\_\_\_ of zero to the world.
5. Writing books by hand was a slow \_\_\_\_\_ and the books were very \_\_\_\_\_.

### C. Give brief answers to the following questions.

1. What are the moulds of letters in the first printing press called?  
\_\_\_\_\_
2. Why did the early humans write on clay tablets?  
\_\_\_\_\_
3. What are used nowadays for typesetting and colour printing?  
\_\_\_\_\_
4. What do you understand by typesetting?  
\_\_\_\_\_
5. Why was it difficult for early man to communicate with others?  
\_\_\_\_\_

## Worksheet 10

A. Name the man shown below and write two lines about his invention.

---

---

---

---



B. What do the following pictures represent? Which civilisation do they belong to?

---

---

---



---

---

---



C. Two Indian scripts are shown below, one ancient and one still in use. Name them.



1. \_\_\_\_\_

2. \_\_\_\_\_

## Worksheet 11

### A. Circle the right option to complete each sentence.

1. Prevention is better than care/cure/cart.
2. A variety of instruments are used to diagnose attitudes/feelings/diseases.
3. Digital thermometers are used for measuring the temperature/height/blood pressure of the body.
4. The replacement of a diseased body part with a healthy one is called transfer/ translation/ transplantation.

### B. Match the name of the doctor/scientist in Column A with the product in Column B.

#### Column A

1. G. D. Fahrenheit
2. Zacharias Jannsen
3. Rene Laennec
4. Sushruta
5. James Simpson
6. Alexander Fleming

#### Column B

- (a) Anaesthesia
- (b) Penicillin
- (c) Stethoscope
- (d) Thermometer
- (e) Microscope
- (f) Surgery

### C. Write the following:

1. Three instruments used for diagnosis.

---

2. Three diseases for which vaccination is used.

---

3. Three healthy habits.

---

## Worksheet 12

A. Name the instruments shown in the pictures below.




1. \_\_\_\_\_



2. \_\_\_\_\_



3. \_\_\_\_\_



4. \_\_\_\_\_


B. These things relate to a healthy life. Describe them.



1. \_\_\_\_\_



2. \_\_\_\_\_



3. \_\_\_\_\_



4. \_\_\_\_\_



5. \_\_\_\_\_

C. These pictures show some unhealthy habits. Describe why you think them unhealthy:



1. \_\_\_\_\_



2. \_\_\_\_\_

## Worksheet 13

### A. Think and answer the following questions.

1. Which of the five people you studied in this lesson do you admire the most and why?

---

---

---

2. In your own opinion what makes a human being great?

---

---

---

### B. Fill in the blanks below.

1. \_\_\_\_\_ believed that the source of knowledge is thinking and reasoning.
2. The rich in the Southern states of the USA wanted the slaves to work on \_\_\_\_\_.
3. Gandhiji led the \_\_\_\_\_ Movement and the \_\_\_\_\_ Movement.
4. Karl Marx wanted that the entire \_\_\_\_\_ should be the owner of everything instead of just a few capitalists.
5. Martin Luther King called his visit to India in 1959 a \_\_\_\_\_ to pay homage to the land of Mahatma Gandhi.

## Worksheet 14

A. See the pictures below and name the persons, each of whom has contributed to the dignity of human life:




1. \_\_\_\_\_



2. \_\_\_\_\_



3. \_\_\_\_\_



4. \_\_\_\_\_




5. \_\_\_\_\_

B. What events do the pictures below show you?



1. \_\_\_\_\_



2. \_\_\_\_\_



3. \_\_\_\_\_



4. \_\_\_\_\_

## Worksheet 15

### A. Answer the following questions.

How did the East India Company change from being a trader to a ruler?

---

---

---

---

---

Explain how the feeling of nationalism grew in India.

---

---

---

---

---

### B. Fill in the banks below.

1. The Company bought Indian goods at \_\_\_\_\_ prices and sold them at very \_\_\_\_\_ rates in Europe.
2. The Indians never \_\_\_\_\_ jointly against the officers of the East India Company.
3. The rule of the \_\_\_\_\_ \_\_\_\_\_ came to an end in 1857.
4. The British introduced the modern system of \_\_\_\_\_ in India.
5. As the feeling of nationalism increased, Indians began to form many \_\_\_\_\_.

### C. Project: Find out from the internet and/or the library about a) Brahmo Samaj b) Arya Samaj. Write a brief paragraph about both of them.



## Worksheet 16

A. Name the following persons.



1. \_\_\_\_\_



2. \_\_\_\_\_



3. \_\_\_\_\_



4. \_\_\_\_\_




5. \_\_\_\_\_

B. Describe what you think these pictures show.




1. \_\_\_\_\_




2. \_\_\_\_\_


C. Name the following members of the INC.




\_\_\_\_\_



\_\_\_\_\_



\_\_\_\_\_



\_\_\_\_\_



## Worksheet 17

### A. Say if the following are True or False.

1. The British planned to partition India in 1915. \_\_\_\_\_
2. The Quit India Movement was started by Subhash Chandra Bose. \_\_\_\_\_
3. The Indian National Army fought against the British. \_\_\_\_\_
4. The Swadeshi Movement encouraged the use of khadi. \_\_\_\_\_
5. Satyagraha was a non-violent method of protest. \_\_\_\_\_

### B. Select the right option to complete the sentences below.

1. The Non-Cooperation Movement was \_\_\_\_\_ after the police station was burned at Chaura Chauri. (encouraged/withdrawn)
2. The Radicals wished to oppose the British through \_\_\_\_\_. (strikes and boycotts/reforms and discussions)
3. The Indian National Congress resolved to achieve \_\_\_\_\_ for India. (Swadeshi/Purna Swaraj)
4. The young people who wished to drive the British out by using force were called \_\_\_\_\_. (Nationalists/Revolutionaries)
5. Subhash Chandra Bose escaped from jail and reached Japan via Afghanistan and \_\_\_\_\_. (Germany/Russia)

### C. Answer the following questions in very few words.

1. Why did the British wish to partition Bengal? \_\_\_\_\_
2. What was the main purpose of Swadeshi movement? \_\_\_\_\_
3. Who ordered the massacre at Jalianwala Bagh? \_\_\_\_\_
4. What were the main principles of Satyagraha? \_\_\_\_\_
5. During which World War was the Quit India Movement started? \_\_\_\_\_

## Worksheet 18

A. Name the following and state whether they were moderates or radicals.



1. \_\_\_\_\_



2. \_\_\_\_\_




3. \_\_\_\_\_


B. Name the people below.



1. \_\_\_\_\_



2. \_\_\_\_\_



3. \_\_\_\_\_



4. \_\_\_\_\_



5. \_\_\_\_\_


C. What movements/events/objects do the pictures below tell you?



1. \_\_\_\_\_



2. \_\_\_\_\_



3. \_\_\_\_\_



4. \_\_\_\_\_

## Worksheet 19

### A. Select the correct options for each question.

1. The \_\_\_\_\_ of India provides two types of government. (President/Constitution)
2. The Lok Sabha can have a maximum of \_\_\_\_\_ members. (545/552)
3. The Rajya Sabha is a \_\_\_\_\_ body. (permanent/temporary)
4. In some elections, a political party is not able to win a clear \_\_\_\_\_. (majority/seat)
5. Some States in our country also have Legislative \_\_\_\_\_. (Associations/Councils)

### B. Say if the following are True or False.

1. The Parliament is an elected body that makes and changes the laws of the country. \_\_\_\_\_
2. The highest judicial body is the High Court of India. \_\_\_\_\_
3. The powers and duties of the government are given in the Constitution of India. \_\_\_\_\_
4. Two-thirds of the members of the Rajya Sabha retire every two years. \_\_\_\_\_
5. The MLAs are elected for a period of four years. \_\_\_\_\_

### C. Fill in the blanks.

1. The Constitution of India has provided for an \_\_\_\_\_ system of judiciary.
2. The \_\_\_\_\_ of the Lok Sabha is the Chairperson elected by the members of the Lok Sabha.
3. New members to the Rajya Sabha are elected by the \_\_\_\_\_ in place of the retired ones.
4. The three tasks of the government are to make \_\_\_\_\_, \_\_\_\_\_ them and to get \_\_\_\_\_ for the people.
5. The total population of India is about \_\_\_\_\_ crores.

## Worksheet 20

A. Name the following.



1. \_\_\_\_\_



2. \_\_\_\_\_




3. \_\_\_\_\_




4. \_\_\_\_\_

B. The following people hold important offices in the Government of India. What are their offices?



1. \_\_\_\_\_



2. \_\_\_\_\_



3. \_\_\_\_\_



4. \_\_\_\_\_

## Worksheet 21

### A. Fill in the blanks.

1. The General Assembly of the UN meets every year in \_\_\_\_\_.
2. Atom bombs were dropped on \_\_\_\_\_ and \_\_\_\_\_ in 1945.
3. War is not a \_\_\_\_\_ to any problem.
4. The United Nations has six \_\_\_\_\_.
5. The headquarters of the UN are at \_\_\_\_\_, USA.

### B. Answer the following questions briefly.

1. When was the Charter of the UNO signed?
2. How has India helped UN in peacekeeping?
3. Which countries had colonies that were looked after by the Trusteeship Council?
4. Who is the present Secretary General of the UN?

### C. Give the full form of the following.

1. UNESCO \_\_\_\_\_
2. UNICEF \_\_\_\_\_
3. WHO \_\_\_\_\_
4. FAO \_\_\_\_\_
5. ILO \_\_\_\_\_



## Worksheet 22

A. To which organisation do the following logos belong?



1. \_\_\_\_\_



2. \_\_\_\_\_



3. \_\_\_\_\_



4. \_\_\_\_\_

B. Name the pictures given below.



1. \_\_\_\_\_



2. \_\_\_\_\_

C. Name the following people.



1. \_\_\_\_\_



2. \_\_\_\_\_



3. \_\_\_\_\_