

## Worksheet 1

### A. Complete the words.

1. E \_ \_ \_ H

2. N \_ \_ \_ T \_ \_ \_

3. J \_ \_ \_ \_ R

4. S \_ \_ U \_ \_

5. M \_ \_ \_ U \_ Y

6. V \_ \_ \_ \_

### B. Fill in the blanks.

1. The family of the Sun, with eight planets, moons and other bodies is called the \_\_\_\_\_.
2. The Earth is \_\_\_\_\_ like a ball.
3. \_\_\_\_\_, a Greek philosopher and scientist, said that the Earth is round.
4. The layer of air around the Earth is called the \_\_\_\_\_.
5. People in early times were scared of \_\_\_\_\_.

### C. Give the opposites of the following:

1. Day \_\_\_\_\_


2. Light \_\_\_\_\_

3. Rise \_\_\_\_\_


4. East \_\_\_\_\_

## Worksheet 2

A. See the pictures and say what they are:




1. \_\_\_\_\_



2. \_\_\_\_\_




3. \_\_\_\_\_



4. \_\_\_\_\_




5. \_\_\_\_\_



6. \_\_\_\_\_

B. Draw the sun rising below:



## Worksheet 3

**A. Write the names of the Oceans and Continents in the correct columns below:**

### OCEANS

1. \_\_\_\_\_
2. \_\_\_\_\_
3. \_\_\_\_\_
4. \_\_\_\_\_
5. \_\_\_\_\_

### CONTINENTS

1. \_\_\_\_\_
2. \_\_\_\_\_
3. \_\_\_\_\_
4. \_\_\_\_\_
5. \_\_\_\_\_
6. \_\_\_\_\_
7. \_\_\_\_\_

**B. Find out what are the directions inside your classroom, using a compass.**

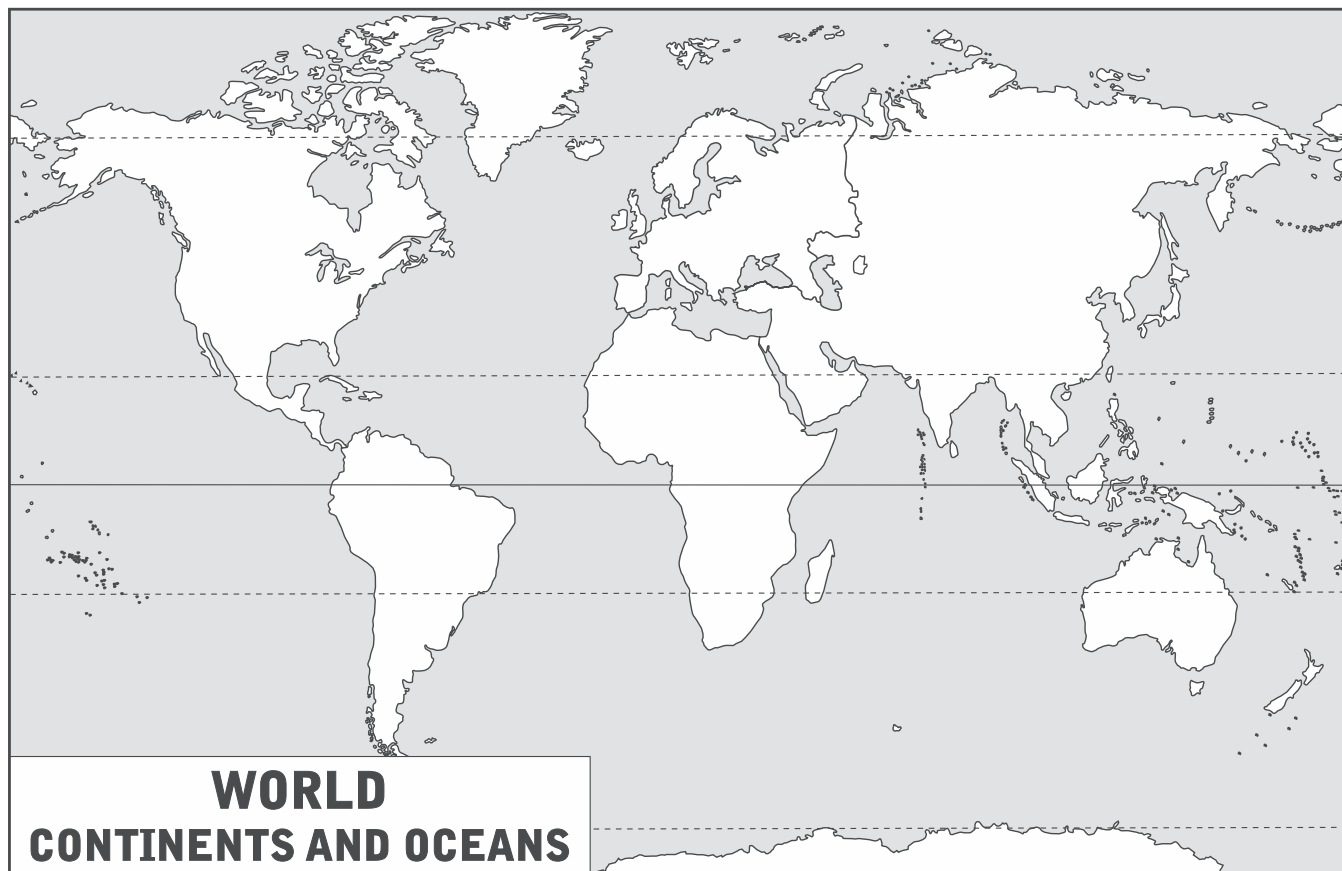
1. Then say in which direction is \_\_\_\_\_
2. The door \_\_\_\_\_
3. The blackboard \_\_\_\_\_
4. The window \_\_\_\_\_
5. Your partner's desk \_\_\_\_\_

**C. Stand in front of a map of India and see in which direction are the following places from a centre point like the city of Bhopal.**

1. Delhi \_\_\_\_\_
2. Kanniyakumari \_\_\_\_\_
3. Kolkata \_\_\_\_\_
4. Surat \_\_\_\_\_

## Worksheet 4

A. On the blank map, write the four directions.



## Worksheet 5

### A. Fill in the blanks.

1. The Moon is the closest \_\_\_\_\_ of the Earth.
2. The Sun rises in the \_\_\_\_\_ and sets in the \_\_\_\_\_.
3. The Sun is made up of hot and burning \_\_\_\_\_.
4. Living things cannot \_\_\_\_\_ on any planet except Earth.
5. The Great Bear is a .

### B. Match the words in Column A with the words in Column B:

#### Column A


1. The Sun
2. The Moon
3. The Great Bear
4. The Milky Way
5. Uranus

#### Column B

- (a) a constellation
- (b) a planet
- (c) a star
- (d) a satellite
- (e) a galaxy

## Worksheet 6

A. Label the planets.



## Worksheet 7

### A. Fill in the blanks.

1. The Government of our country is \_\_\_\_\_ by the people of India.
2. The \_\_\_\_\_ Government controls the whole country.
3. The Union Government is also called the \_\_\_\_\_ Government.
4. The governments of the \_\_\_\_\_ are guided by the Central Government.
5. The Central and State Governments help each other in the \_\_\_\_\_ and \_\_\_\_\_ of the people.

### B. Name the capitals of the following States or UTs:

- |                      |       |                |       |
|----------------------|-------|----------------|-------|
| 1. Arunachal Pradesh | _____ | 5. Tamil Nadu  | _____ |
| 2. Goa               | _____ | 6. Lakshadweep | _____ |
| 3. Jharkhand         | _____ | 7. Uttarakhand | _____ |
| 4. Meghalaya         | _____ | 8. Odisha      | _____ |

## Worksheet 8

A. Mark all the states and their capitals on the map. Colour each state in different colour.





## Worksheet 9

### A. Match the words in Column A with the words in Column B.

#### Column A

1. Bay of Bengal
2. Thar
3. Lakshadweep
4. Western Ghats
5. Kosi

#### Column B

- (a) River
- (b) Mountain
- (c) Sea
- (d) Desert
- (e) Island

### B. Give one word answers to the following:

1. A land surrounded by water on three sides: \_\_\_\_\_
2. A land surrounded by water on all sides: \_\_\_\_\_
3. A highland that is flat on top or uneven: \_\_\_\_\_
4. A dry, sandy land, with little or no rainfall: \_\_\_\_\_
5. A highland with peaks: \_\_\_\_\_

### C. Complete the following:

1. The Brahmaputra has four other names. It is called \_\_\_\_\_ in Tibet, \_\_\_\_\_ in Bangladesh, \_\_\_\_\_ when it meets the Ganga and \_\_\_\_\_ when it enters the Bay of Bengal.
2. The rivers \_\_\_\_\_, \_\_\_\_\_ and \_\_\_\_\_ flow into the Ganga.
3. The \_\_\_\_\_ and \_\_\_\_\_ ranges lie in the Central highlands and the \_\_\_\_\_ lie in the southern part of India.
4. The two island groups of India are named \_\_\_\_\_ and \_\_\_\_\_ and \_\_\_\_\_ Islands.

## Worksheet 10

A. See the pictures below and name the landform.



1. \_\_\_\_\_



2. \_\_\_\_\_



3. \_\_\_\_\_

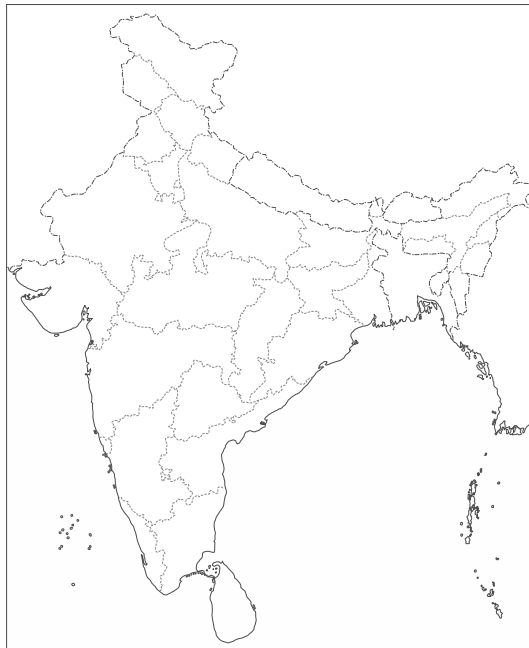


4. \_\_\_\_\_



5. \_\_\_\_\_

B. On the map of India, mark the Himalayas, the Northern Plains, the Thar Desert, the Southern Plateau and the Island groups.



## Worksheet 11

### A. Answer the following questions.

1. What happens to the environment due to man-made changes?
2. What are the effects of air pollution?
3. Mention one way in which you can help reduce water pollution.
4. Name three living and three non-living things.
5. How can you help reduce noise pollution?

### B. Fill in the blanks.

1. \_\_\_\_\_ is made up of all living and non-living things around us.
2. World Environment Day is celebrated on \_\_\_\_\_.
3. Man-made changes disturb the \_\_\_\_\_ of the environment.
4. \_\_\_\_\_ activities are responsible for polluting the air.
5. Bursting crackers causes \_\_\_\_\_ and \_\_\_\_\_ pollution.

## Worksheet 12

A. See below pictures of some activities and put a cross on the ones that cause pollution and a tick on those that do not cause pollution.



1. \_\_\_\_\_




2. \_\_\_\_\_



3. \_\_\_\_\_



4. \_\_\_\_\_



5. \_\_\_\_\_

## Worksheet 13

### A. Fill in the blanks.

1. The Gram Panchayat gets \_\_\_\_\_ from the State government.
2. The \_\_\_\_\_ services are easily available in cities.
3. Villages now have good \_\_\_\_\_ and \_\_\_\_\_ centres.
4. The Municipal Committee raises funds by \_\_\_\_\_.
5. Members of the Municipal Committees are called \_\_\_\_\_.

### B. Say which words mentioned in Column A belong to the city and which to the village.

Column A	Village	City
1. Mayor		
2. Tractor		
3. Flyover		
4. Fire Brigade		
5. Panchayat		
6. Bullock cart		

## Worksheet 14

A. Here are some pictures from city and village life. Write C or V in the box below each picture to show if they belong to a city or a village.

1.



2.



3.



4.



5.



6.



7.



8.



## Worksheet 15

### A. Tick which of the following people wear uniforms:

- |               |                  |              |
|---------------|------------------|--------------|
| 1. Nurse      | 2. Waiter        | 3. Housewife |
| 4. Labourer   | 5. Pilot         | 6. Teacher   |
| 7. Shopkeeper | 8. Hockey player | 9. Clown     |
| 10. Soldier   |                  |              |

### B. Fill in the blanks.

1. \_\_\_\_\_ is the most popular dress of women in India.
2. Men in cities usually like to wear \_\_\_\_\_ and \_\_\_\_\_.
3. In Uttar Pradesh and Bengal, men usually wear \_\_\_\_\_ and \_\_\_\_\_.
4. Varanasi and Kanjeevaram are places known for \_\_\_\_\_ silk sarees.
5. The \_\_\_\_\_ of wearing a saree varies in different parts of India.

## Worksheet 16

A. In which state will you see the following dresses?



1. \_\_\_\_\_



2. \_\_\_\_\_



3. \_\_\_\_\_



4. \_\_\_\_\_



## Worksheet 17

### A. Fill in the blanks.

1. The offices of other countries are called \_\_\_\_\_ or \_\_\_\_\_.
2. All important \_\_\_\_\_ are celebrated here.
3. \_\_\_\_\_ from all over the world come to Delhi.
4. The two blocks of the \_\_\_\_\_ are North Block and South Block.
5. The \_\_\_\_\_ is lit at India Gate.

### B. Answer the following questions.

1. The gardens in the Rashtrapati Bhavan are \_\_\_\_\_
2. The city built by emperor Shahjahan was called \_\_\_\_\_
3. The British shifted the capital to Delhi from \_\_\_\_\_
4. The Prime Minister hoists the National Flag here on 15 August \_\_\_\_\_

## Worksheet 18

A. See the pictures of monuments of Delhi given below and name them:



1. \_\_\_\_\_




2. \_\_\_\_\_




3. \_\_\_\_\_



4. \_\_\_\_\_



5. \_\_\_\_\_



6. \_\_\_\_\_



7. \_\_\_\_\_



8. \_\_\_\_\_



9. \_\_\_\_\_