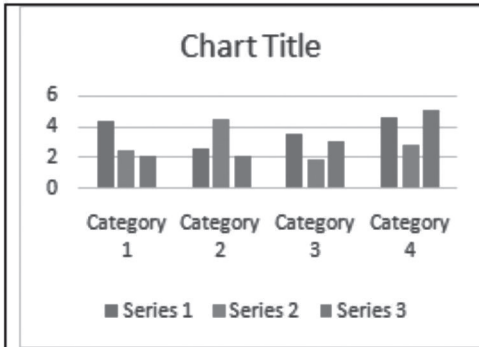


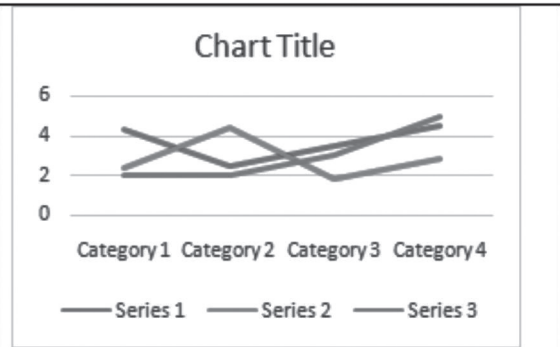
# 6. SmartArt Graphics with PowerPoint 2013

## WORKSHEET

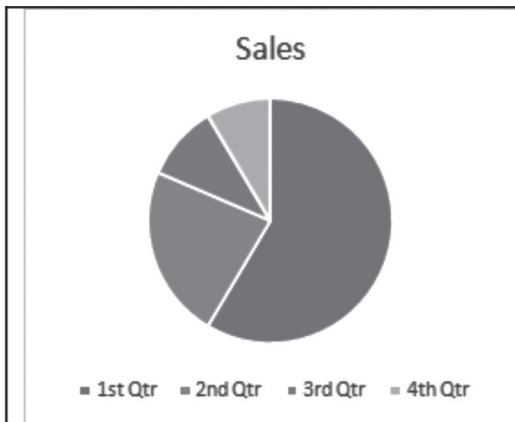
### I. Name the following chart types:



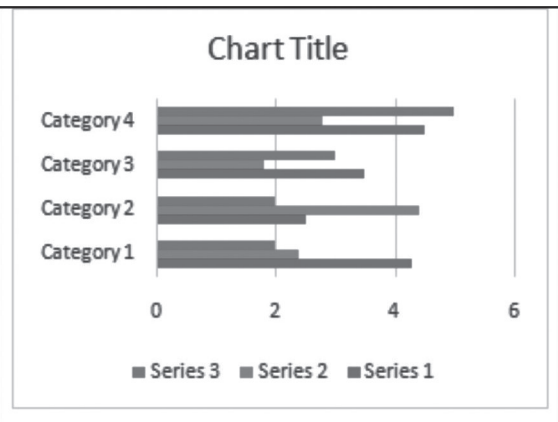
1. \_\_\_\_\_



2. \_\_\_\_\_



3. \_\_\_\_\_



4. \_\_\_\_\_

### II. Which type of chart will you use to represent the following?

1. Percentage share of each salesperson in total sales. \_\_\_\_\_
2. Comparison of sales made by each salesperson. \_\_\_\_\_
3. Trend of sales in January of each year. \_\_\_\_\_
4. Comparison of total sales done in last three years. \_\_\_\_\_
5. Percentage share of one salesperson's sales. \_\_\_\_\_